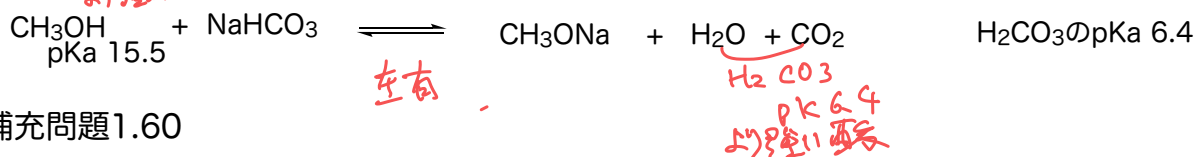
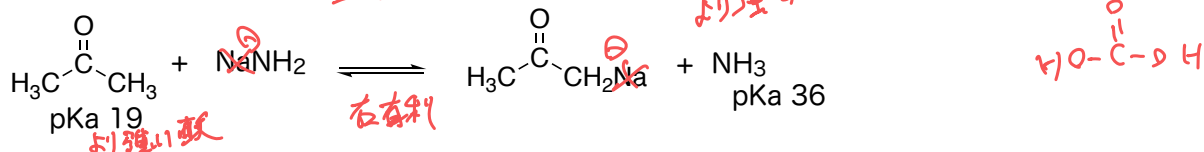
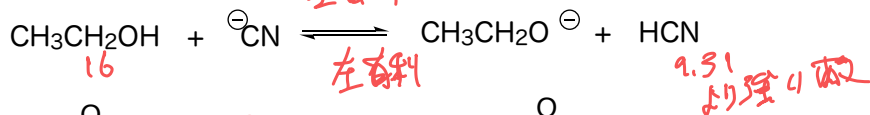
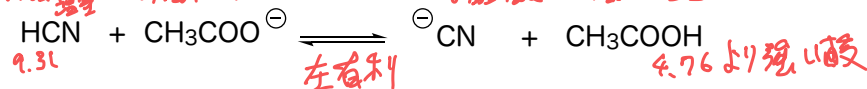
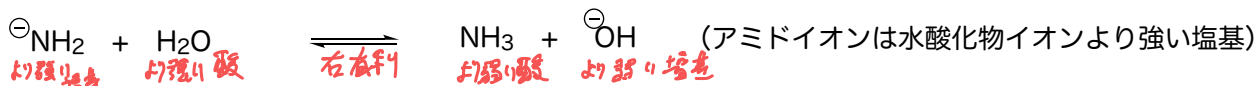


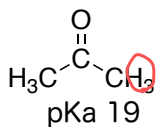
問題1.21,22 補充問題56, 58

次の反応の有利な方向は右向きか左向きか

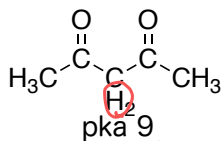


補充問題1.60

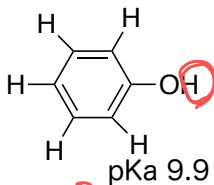
次の有機化合物で水素イオンとなる水素を示し、酸性の強い順を示せ



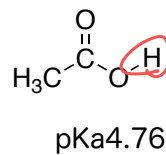
4



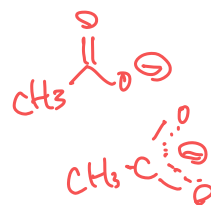
2



3



1



補充問題1.61

1.60の中でNaOHとほぼ完全に反応するのはどれか

